

$$\text{snail}(5) + \text{snail}(4) = \text{snail}(\quad)$$



$$\text{snail}(8) + \text{snail}(2) = \text{snail}(\quad)$$

$$\text{snail}(1) + \text{snail}(6) = \text{snail}(\quad)$$



$$\text{snail}(7) + \text{snail}(3) = \text{snail}(\quad)$$

$$\text{snail}(2) + \text{snail}(4) = \text{snail}(\quad)$$





 +  =



_____ + _____ = _____

 +  =



_____ + _____ = _____

 +  =

_____ + _____ = _____

 +  =

_____ + _____ = _____

 +  =




_____ + _____ = _____






Kindergarten Math






เลขอนุบาล

   =




$$1 + 2 + 3 =$$

   =

$$2 + 2 + 1 =$$

   =

$$1 + 2 + 4 =$$

   =

$$2 + 2 + 3 =$$





$$5 + \underline{\quad} = \underline{\quad}$$



$$8 - \underline{\quad} = \underline{\quad}$$



$$5 + \underline{\quad} = \underline{\quad}$$



$$9 - \underline{\quad} = \underline{\quad}$$



$$5 + \underline{\quad} = \underline{\quad}$$



$$10 - \underline{\quad} = \underline{\quad}$$



$$5 + \underline{\quad} = \underline{\quad}$$



$$7 - \underline{\quad} = \underline{\quad}$$



$$6 + \underline{\quad} = \underline{\quad}$$



$$7 - \underline{\quad} = \underline{\quad}$$



$$6 + \underline{\quad} = \underline{\quad}$$






$$8 - \underline{\quad} = \underline{\quad}$$

أنشطة في الرياضيات

1- أحسب عدد السيارات و الأزهار في كل حالة:

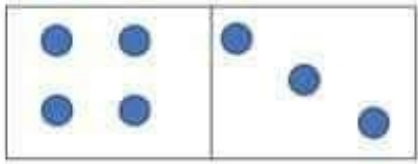
 +  =

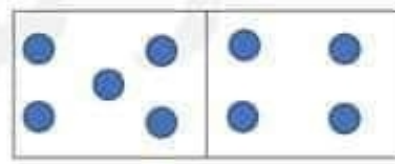
 -  =

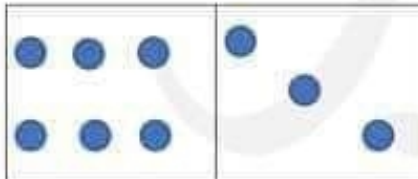
 -  =

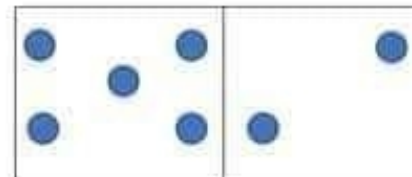
 +  =

2- أحسب عدد النقاط داخل النرد:


..... + =


..... + =


..... - =


..... - =

من اعداد الأستاذة: إلهيب

$2 + \square = 8$

$6 + \square = 9$

$1 + \square = 9$

$5 + \square = 12$

$5 + \square = 7$

$5 + \square = 9$

$4 + \square = 10$

$3 + \square = 7$

$7 + \square = 10$

$0 + \square = 6$

$3 + \square = 8$

$1 + \square = 10$



Escola: _____


Turno: _____ Professora: _____

Aluno: _____ Data: _____




Dominó Matemático


Qual é a soma dos dominós?




$$3 + 3 = 6$$




$$_ + _ = _$$




$$_ + _ = _$$




$$_ + _ = _$$



$$_ + _ = _$$



$$_ + _ = _$$



$$_ + _ = _$$

www.criancas.com.br

