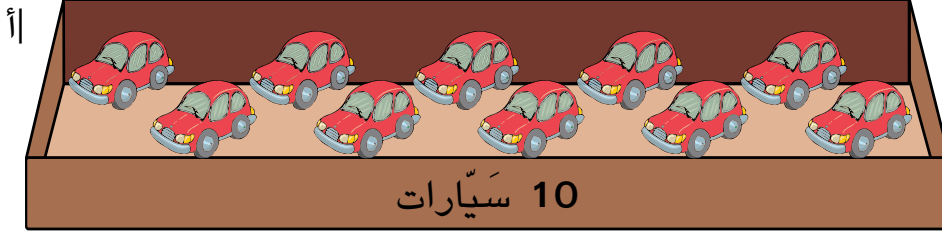
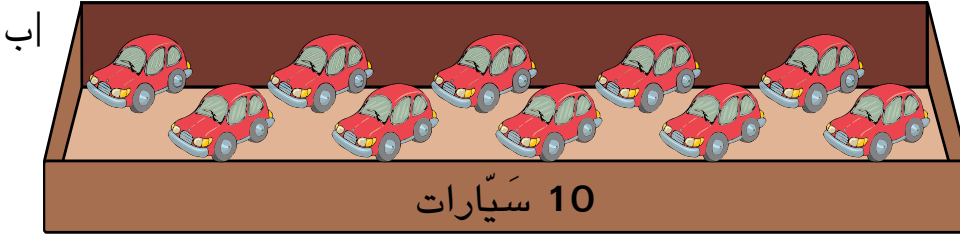


كَمْ سَيَّارَةً يَوجَد مَعًا - دَاخِلَ العُلبَةِ وَخَارِجَ العُلبَةِ؟



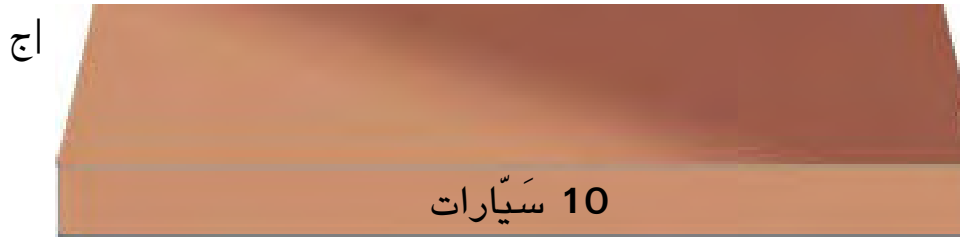
$$10 + \underline{\quad} = \underline{\quad}$$



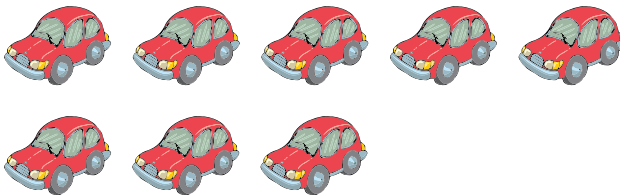
$$10 + \underline{\quad} = \underline{\quad}$$



فِي العُلبَةِ المُمْلَئَةِ
يَوجَد 10 سَيَّارَات.

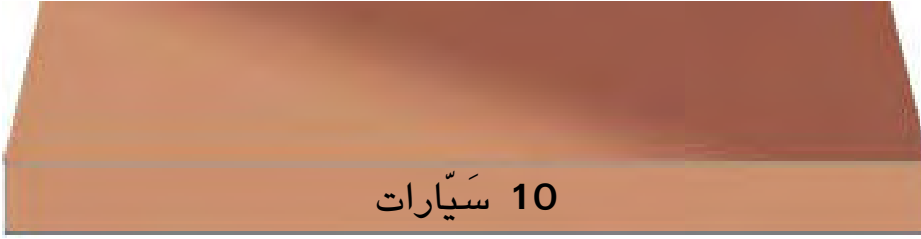


$$10 + \underline{\quad} = \underline{\quad}$$

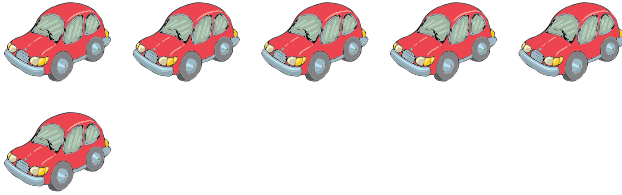


يَتَّبِعْ

اد



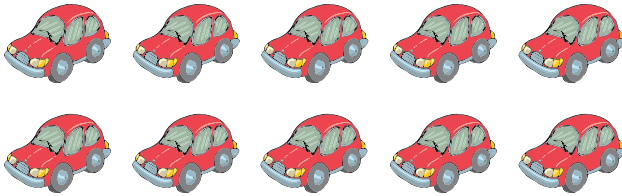
$$10 + \underline{\quad} = \underline{\quad}$$



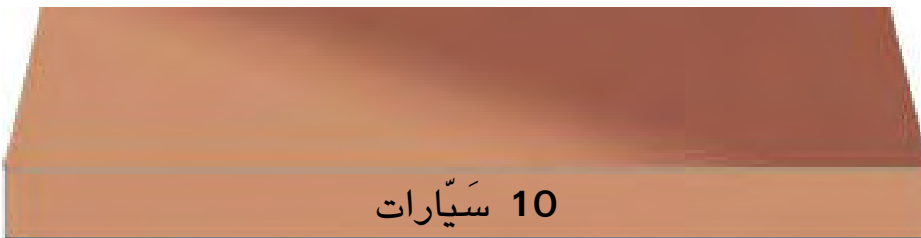
ها



$$10 + \underline{\quad} = \underline{\quad}$$



او



$$10 + \underline{\quad} = \underline{\quad}$$

