

مهمة حساب جدول ضرب

حل التمارين التالية بواسطة الرسم والجمع التكراري

$7 \times 2 =$

$8 \times 4 =$

$9 \times 3 =$

$9 \times 5 =$

$8 \times 5 =$

$7 \times 7 =$

$7 \times 4 =$

$8 \times 7 =$

$8 \times 3 =$

$9 \times 2 =$

$7 \times 5 =$

مهمة حساب جدول ضرب

أكمل الناقص فى التمارين التالية:

$$7 \times \underline{\quad} = 14$$

$$7 \times \underline{\quad} = 35$$

$$6 \times \underline{\quad} = 12$$

$$9 \times \underline{\quad} = 18$$

$$9 \times \underline{\quad} = 27$$

$$7 \times \underline{\quad} = 21$$

$$8 \times \underline{\quad} = 24$$

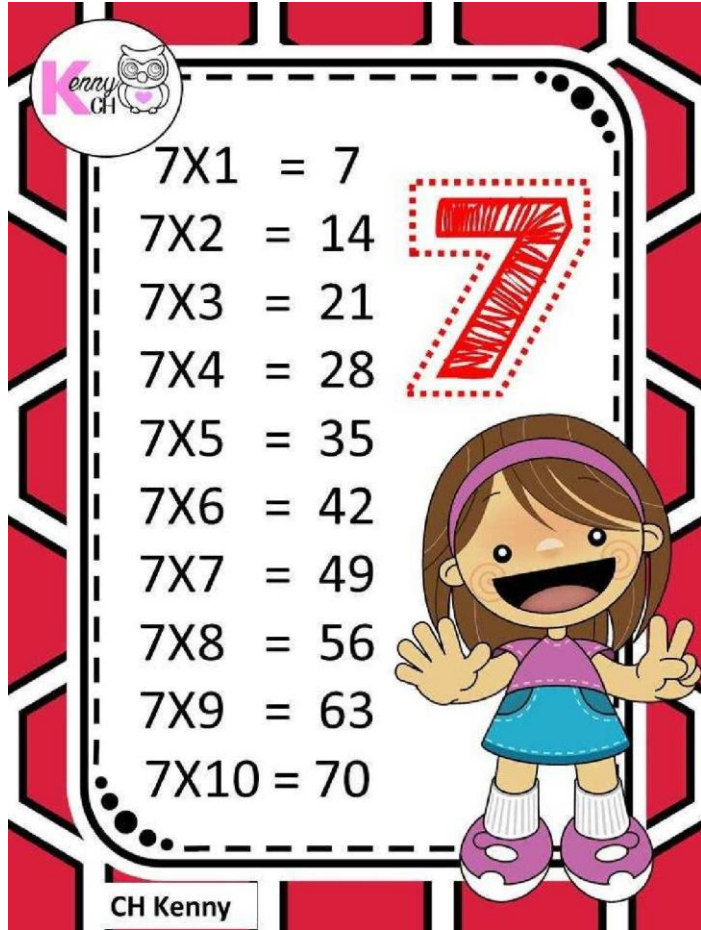
$$7 \times \underline{\quad} = 42$$


$$8 \times \underline{\quad} = 40$$

$$9 \times \underline{\quad} = 36$$

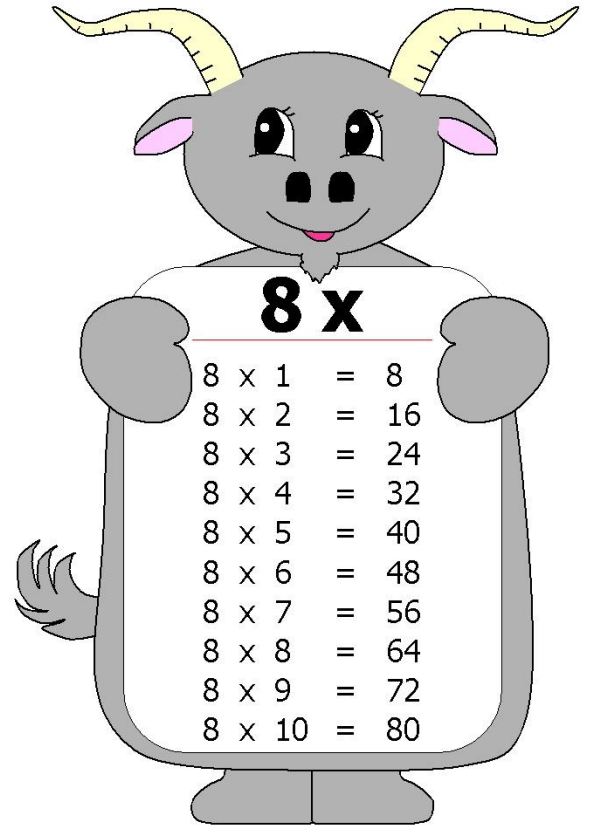
$$8 \times \underline{\quad} = 40$$

انسخ جدول الضرب في دفترك للأعداد 8،7،9



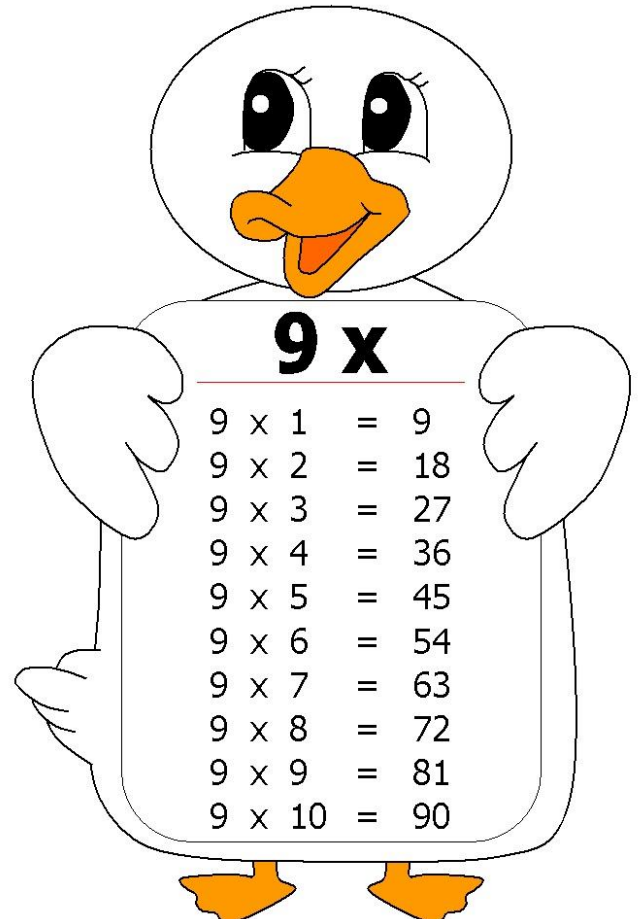
 7X1 = 7
7X2 = 14
7X3 = 21
7X4 = 28
7X5 = 35
7X6 = 42
7X7 = 49
7X8 = 56
7X9 = 63
7X10 = 70

CH Kenny



8 x

8 x 1	=	8
8 x 2	=	16
8 x 3	=	24
8 x 4	=	32
8 x 5	=	40
8 x 6	=	48
8 x 7	=	56
8 x 8	=	64
8 x 9	=	72
8 x 10	=	80



9 x

9 x 1	=	9
9 x 2	=	18
9 x 3	=	27
9 x 4	=	36
9 x 5	=	45
9 x 6	=	54
9 x 7	=	63
9 x 8	=	72
9 x 9	=	81
9 x 10	=	90